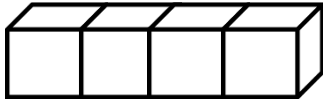




ΔΗΜΟΤΙΚΟ ΣΧΟΛΕΙΟ .....

Όνομα: \_\_\_\_\_ Τάξη: \_\_\_\_\_

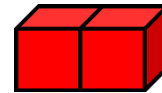
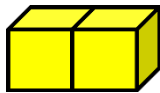
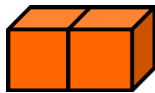
**Εισαγωγή στον πολλαπλασιασμό**



$$\square + \square = \square$$

$\square$  φορές  $\square$  κάνουν  $\square$

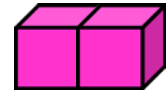
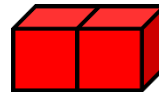
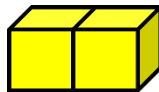
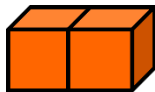
$$\square \times \square = \square$$



$$\square + \square + \square + \square = \square$$

$\square$  φορές  $\square$  κάνουν  $\square$

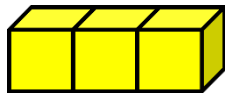
$$\square \times \square = \square$$



$$\square + \square + \square + \square + \square = \square$$

$\square$  φορές  $\square$  κάνουν  $\square$

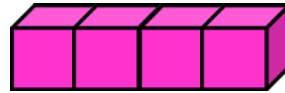
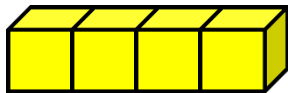
$$\square \times \square = \square$$



$$\square + \square = \square$$

$\square$  φορές  $\square$  κάνουν  $\square$

$$\square \times \square = \square$$






$$\square + \square = \square$$

$\square$  φορές  $\square$  κάνουν  $\square$

$$\square \times \square = \square$$

2. Σχεδίασε 2 κεράκια σε κάθε τούρτα:



$$\square + \square + \square = \square$$

$\square$  φορές  $\square$  κάνουν  $\square$

$$\square \times \square = \square$$