

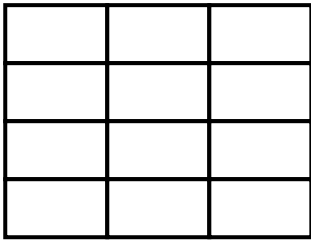


ΔΗΜΟΤΙΚΟ ΣΧΟΛΕΙΟ

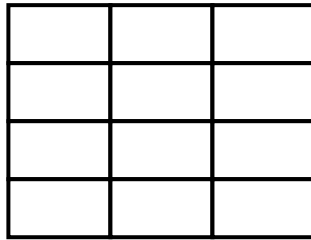
Όνομα: _____ Τάξη: _____

Πολλαπλασιασμός- Διατάξεις

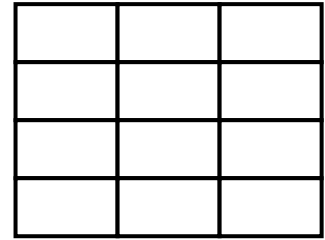
1. Χρωματίζω όσα κουτάκια μου λέει η μαθηματική πρόταση:



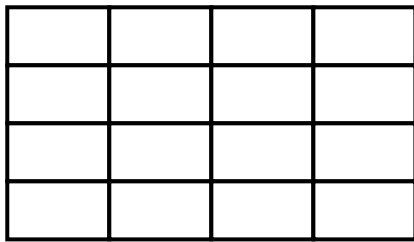
$$1 \times 3 =$$



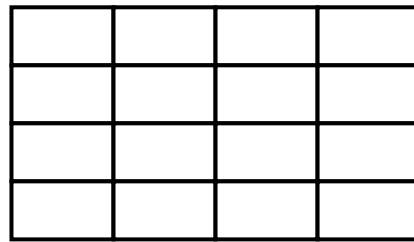
$$2 \times 3 =$$



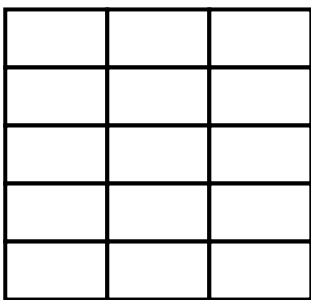
$$3 \times 3 =$$



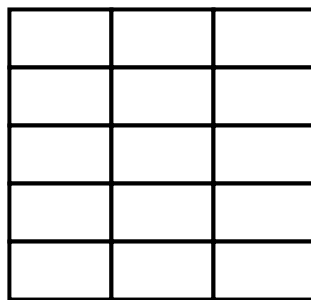
$$1 \times 4 =$$



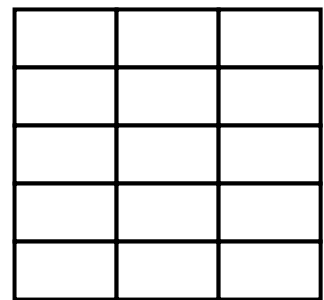
$$2 \times 4 =$$



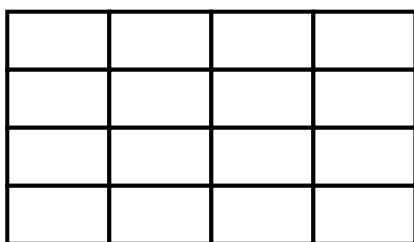
$$1 \times 2 =$$



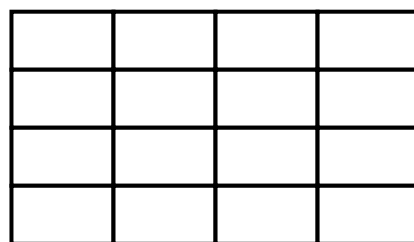
$$2 \times 2 =$$



$$5 \times 2 =$$



$$3 \times 2 =$$



$$4 \times 2 =$$

2. Γράφω στο κουτάκι την μαθηματική πρόταση που ταιριάζει:

