



ΔΗΜΟΤΙΚΟ ΣΧΟΛΕΙΟ _____

Όνομα: _____

Τάξη: _____

1. Βρες το άθροισμα με τη βοήθεια των κύβων.



$$\boxed{9} + \boxed{5} = \square$$



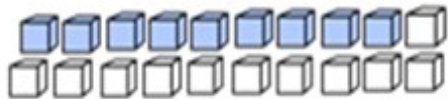
$$\boxed{8} + \boxed{6} = \square$$



$$\boxed{9} + \boxed{7} = \square$$



$$\boxed{8} + \boxed{4} = \square$$



$$\boxed{9} + \boxed{3} = \square$$



$$\boxed{8} + \boxed{9} = \square$$



$$\boxed{9} + \boxed{6} = \square$$



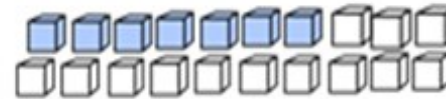
$$\boxed{8} + \boxed{7} = \square$$



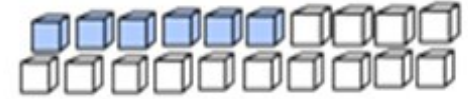
$$\boxed{9} + \boxed{8} = \square$$



$$\boxed{8} + \boxed{3} = \square$$



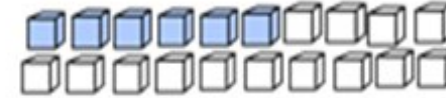
$$\boxed{7} + \boxed{6} = \square$$



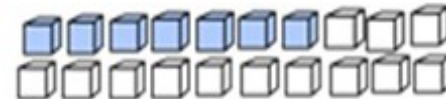
$$\boxed{6} + \boxed{9} = \square$$



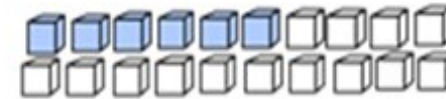
$$\boxed{7} + \boxed{8} = \square$$



$$\boxed{6} + \boxed{5} = \square$$



$$\boxed{7} + \boxed{5} = \square$$



$$\boxed{6} + \boxed{7} = \square$$



$$\boxed{7} + \boxed{7} = \square$$



$$\boxed{6} + \boxed{8} = \square$$

2. Βρες το άθροισμα με όποιο τρόπο θέλεις.

$2 + 9 =$

$8 + 4 =$

$3 + 9 =$

$7 + 5 =$

$3 + 8 =$

$7 + 4 =$

$4 + 9 =$

$6 + 7 =$

$8 + 8 =$

$6 + 8 =$

$7 + 8 =$

$5 + 8 =$

$9 + 9 =$

$9 + 5 =$

$7 + 7 =$

$6 + 6 =$